



Measure the width and height of each block in inches and in centimeters.

Ex)



1)



2)



3)



4)



Answers

Ex.(in-w) 5

Ex.(in-h) 1 1/2

Ex.(cm-w) 12

Ex.(cm-h) 4

1.(in-w) _____

1.(in-h) _____

1.(cm-w) _____

1.(cm-h) _____

2.(in-w) _____

2.(in-h) _____

2.(cm-w) _____

2.(cm-h) _____

3.(in-w) _____

3.(in-h) _____

3.(cm-w) _____

3.(cm-h) _____

4.(in-w) _____

4.(in-h) _____



4.(cm-w) _____

4.(cm-h) _____

In		1		2		3		4		5		6		7				
Cm	1	2	3	4	5	6	7	8	9	10	11	12	13	14	15	16	17	18
In		1		2		3		4		5		6		7				
Cm	1	2	3	4	5	6	7	8	9	10	11	12	13	14	15	16	17	18
In		1		2		3		4		5		6		7				
Cm	1	2	3	4	5	6	7	8	9	10	11	12	13	14	15	16	17	18
In		1		2		3		4		5		6		7				
Cm	1	2	3	4	5	6	7	8	9	10	11	12	13	14	15	16	17	18
In		1		2		3		4		5		6		7				
Cm	1	2	3	4	5	6	7	8	9	10	11	12	13	14	15	16	17	18
In		1		2		3		4		5		6		7				
Cm	1	2	3	4	5	6	7	8	9	10	11	12	13	14	15	16	17	18
In		1		2		3		4		5		6		7				
Cm	1	2	3	4	5	6	7	8	9	10	11	12	13	14	15	16	17	18
In		1		2		3		4		5		6		7				
Cm	1	2	3	4	5	6	7	8	9	10	11	12	13	14	15	16	17	18
In		1		2		3		4		5		6		7				
Cm	1	2	3	4	5	6	7	8	9	10	11	12	13	14	15	16	17	18



Measure the width and height of each block in inches and in centimeters.



Answers

Ex.(in-w) 5

Ex.(in-h) 1 1/2

Ex.(cm-w) 12

Ex.(cm-h) 4

1.(in-w) 2

1.(in-h) 0 1/2

1.(cm-w) 5.1

1.(cm-h) 1.3

2.(in-w) 4

2.(in-h) 0 1/2

2.(cm-w) 10.2

2.(cm-h) 1.3

3.(in-w) 1 1/2

3.(in-h) 1 1/2

3.(cm-w) 3.8

3.(cm-h) 3.8

4.(in-w) 0 1/2

4.(in-h) 0 1/2

4.(cm-w) 1.3

4.(cm-h) 1.3



Measure the width and height of each block in inches and in centimeters.

Ex)



Answers


Ex.(in-w) 5

Ex.(in-h) 1 1/2

Ex.(cm-w) 12

Ex.(cm-h) 4

1)




1.(in-w) _____

1.(in-h) _____

1.(cm-w) _____

1.(cm-h) _____

2)



2.(in-w) _____

2.(in-h) _____

2.(cm-w) _____

2.(cm-h) _____

3)



3.(in-w) _____

3.(in-h) _____

3.(cm-w) _____

3.(cm-h) _____

4)



4.(in-w) _____

4.(in-h) _____



4.(cm-w) _____

4.(cm-h) _____

In		1		2		3		4		5		6		7				
Cm	1	2	3	4	5	6	7	8	9	10	11	12	13	14	15	16	17	18
In		1		2		3		4		5		6		7				
Cm	1	2	3	4	5	6	7	8	9	10	11	12	13	14	15	16	17	18
In		1		2		3		4		5		6		7				
Cm	1	2	3	4	5	6	7	8	9	10	11	12	13	14	15	16	17	18
In		1		2		3		4		5		6		7				
Cm	1	2	3	4	5	6	7	8	9	10	11	12	13	14	15	16	17	18
In		1		2		3		4		5		6		7				
Cm	1	2	3	4	5	6	7	8	9	10	11	12	13	14	15	16	17	18
In		1		2		3		4		5		6		7				
Cm	1	2	3	4	5	6	7	8	9	10	11	12	13	14	15	16	17	18
In		1		2		3		4		5		6		7				
Cm	1	2	3	4	5	6	7	8	9	10	11	12	13	14	15	16	17	18
In		1		2		3		4		5		6		7				
Cm	1	2	3	4	5	6	7	8	9	10	11	12	13	14	15	16	17	18
In		1		2		3		4		5		6		7				
Cm	1	2	3	4	5	6	7	8	9	10	11	12	13	14	15	16	17	18



Measure the width and height of each block in inches and in centimeters.



Answers

Ex.(in-w) 5

Ex.(in-h) 1 1/2

Ex.(cm-w) 12

Ex.(cm-h) 4

1.(in-w) 5

1.(in-h) 1 1/2

1.(cm-w) 12.7

1.(cm-h) 3.8

2.(in-w) 1 1/2

2.(in-h) 1

2.(cm-w) 3.8

2.(cm-h) 2.5

3.(in-w) 3

3.(in-h) 0 1/2

3.(cm-w) 7.6

3.(cm-h) 1.3

4.(in-w) 0 1/2

4.(in-h) 0 1/2

4.(cm-w) 1.3

4.(cm-h) 1.3



Measure the width and height of each block in inches and in centimeters.

Ex)



Answers

Ex.(in-w) 5

Ex.(in-h) 1 1/2

Ex.(cm-w) 12

Ex.(cm-h) 4

1)




1.(in-w) _____

1.(in-h) _____

1.(cm-w) _____

1.(cm-h) _____

2)




2.(in-w) _____

2.(in-h) _____

2.(cm-w) _____

2.(cm-h) _____

3)




3.(in-w) _____

3.(in-h) _____

3.(cm-w) _____

3.(cm-h) _____

4)



4.(in-w) _____

4.(in-h) _____




4.(cm-w) _____

4.(cm-h) _____

In		1		2		3		4		5		6		7				
Cm	1	2	3	4	5	6	7	8	9	10	11	12	13	14	15	16	17	18
In		1		2		3		4		5		6		7				
Cm	1	2	3	4	5	6	7	8	9	10	11	12	13	14	15	16	17	18
In		1		2		3		4		5		6		7				
Cm	1	2	3	4	5	6	7	8	9	10	11	12	13	14	15	16	17	18
In		1		2		3		4		5		6		7				
Cm	1	2	3	4	5	6	7	8	9	10	11	12	13	14	15	16	17	18
In		1		2		3		4		5		6		7				
Cm	1	2	3	4	5	6	7	8	9	10	11	12	13	14	15	16	17	18
In		1		2		3		4		5		6		7				
Cm	1	2	3	4	5	6	7	8	9	10	11	12	13	14	15	16	17	18
In		1		2		3		4		5		6		7				
Cm	1	2	3	4	5	6	7	8	9	10	11	12	13	14	15	16	17	18
In		1		2		3		4		5		6		7				
Cm	1	2	3	4	5	6	7	8	9	10	11	12	13	14	15	16	17	18
In		1		2		3		4		5		6		7				
Cm	1	2	3	4	5	6	7	8	9	10	11	12	13	14	15	16	17	18



Measure the width and height of each block in inches and in centimeters.



Answers

Ex.(in-w) 5

Ex.(in-h) 1 1/2

Ex.(cm-w) 12

Ex.(cm-h) 4

1.(in-w) 1 1/2

1.(in-h) 0 1/2

1.(cm-w) 3.8

1.(cm-h) 1.3

2.(in-w) 4

2.(in-h) 1

2.(cm-w) 10.2

2.(cm-h) 2.5

3.(in-w) 2

3.(in-h) 1 1/2

3.(cm-w) 5.1

3.(cm-h) 3.8

4.(in-w) 3


4.(in-h) 1

4.(cm-w) 7.6

4.(cm-h) 2.5



Measure the width and height of each block in inches and in centimeters.




Answers

Ex.(in-w) 5

Ex.(in-h) 1 1/2

Ex.(cm-w) 12

Ex.(cm-h) 4



1.(in-w) _____

1.(in-h) _____

1.(cm-w) _____

1.(cm-h) _____



2.(in-w) _____

2.(in-h) _____

2.(cm-w) _____

2.(cm-h) _____




3.(in-w) _____

3.(in-h) _____

3.(cm-w) _____

3.(cm-h) _____



4.(in-w) _____

4.(in-h) _____





4.(cm-w) _____

4.(cm-h) _____

In		1		2		3		4		5		6		7				
Cm	1	2	3	4	5	6	7	8	9	10	11	12	13	14	15	16	17	18
In		1		2		3		4		5		6		7				
Cm	1	2	3	4	5	6	7	8	9	10	11	12	13	14	15	16	17	18
In		1		2		3		4		5		6		7				
Cm	1	2	3	4	5	6	7	8	9	10	11	12	13	14	15	16	17	18
In		1		2		3		4		5		6		7				
Cm	1	2	3	4	5	6	7	8	9	10	11	12	13	14	15	16	17	18
In		1		2		3		4		5		6		7				
Cm	1	2	3	4	5	6	7	8	9	10	11	12	13	14	15	16	17	18
In		1		2		3		4		5		6		7				
Cm	1	2	3	4	5	6	7	8	9	10	11	12	13	14	15	16	17	18
In		1		2		3		4		5		6		7				
Cm	1	2	3	4	5	6	7	8	9	10	11	12	13	14	15	16	17	18
In		1		2		3		4		5		6		7				
Cm	1	2	3	4	5	6	7	8	9	10	11	12	13	14	15	16	17	18
In		1		2		3		4		5		6		7				
Cm	1	2	3	4	5	6	7	8	9	10	11	12	13	14	15	16	17	18



Measure the width and height of each block in inches and in centimeters.



Answers

Ex.(in-w) 5

Ex.(in-h) 1 1/2

Ex.(cm-w) 12

Ex.(cm-h) 4

1.(in-w) 5

1.(in-h) 1 1/2

1.(cm-w) 12.7

1.(cm-h) 3.8

2.(in-w) 2

2.(in-h) 1 1/2

2.(cm-w) 5.1

2.(cm-h) 3.8

3.(in-w) 3

3.(in-h) 0 1/2

3.(cm-w) 7.6

3.(cm-h) 1.3

4.(in-w) 1


4.(in-h) 1 1/2

4.(cm-w) 2.5

4.(cm-h) 3.8



Measure the width and height of each block in inches and in centimeters.




Answers

Ex.(in-w) 5

Ex.(in-h) 1 1/2

Ex.(cm-w) 12

Ex.(cm-h) 4

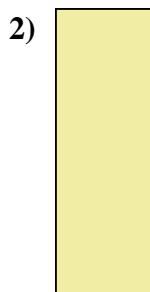


1.(in-w) _____

1.(in-h) _____

1.(cm-w) _____

1.(cm-h) _____



2.(in-w) _____

2.(in-h) _____

2.(cm-w) _____

2.(cm-h) _____




3.(in-w) _____

3.(in-h) _____

3.(cm-w) _____

3.(cm-h) _____



4.(in-w) _____

4.(in-h) _____



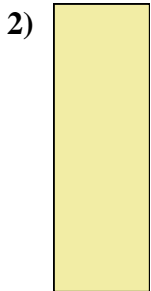

4.(cm-w) _____

4.(cm-h) _____

In		1		2		3		4		5		6		7				
Cm	1	2	3	4	5	6	7	8	9	10	11	12	13	14	15	16	17	18
In		1		2		3		4		5		6		7				
Cm	1	2	3	4	5	6	7	8	9	10	11	12	13	14	15	16	17	18
In		1		2		3		4		5		6		7				
Cm	1	2	3	4	5	6	7	8	9	10	11	12	13	14	15	16	17	18
In		1		2		3		4		5		6		7				
Cm	1	2	3	4	5	6	7	8	9	10	11	12	13	14	15	16	17	18
In		1		2		3		4		5		6		7				
Cm	1	2	3	4	5	6	7	8	9	10	11	12	13	14	15	16	17	18
In		1		2		3		4		5		6		7				
Cm	1	2	3	4	5	6	7	8	9	10	11	12	13	14	15	16	17	18
In		1		2		3		4		5		6		7				
Cm	1	2	3	4	5	6	7	8	9	10	11	12	13	14	15	16	17	18
In		1		2		3		4		5		6		7				
Cm	1	2	3	4	5	6	7	8	9	10	11	12	13	14	15	16	17	18
In		1		2		3		4		5		6		7				
Cm	1	2	3	4	5	6	7	8	9	10	11	12	13	14	15	16	17	18



Measure the width and height of each block in inches and in centimeters.



Answers

Ex.(in-w) 5

Ex.(in-h) 1 1/2

Ex.(cm-w) 12

Ex.(cm-h) 4

1.(in-w) 5

1.(in-h) 1 1/2

1.(cm-w) 12.7

1.(cm-h) 3.8

2.(in-w) 0 1/2

2.(in-h) 1 1/2

2.(cm-w) 1.3

2.(cm-h) 3.8

3.(in-w) 4

3.(in-h) 1

3.(cm-w) 10.2

3.(cm-h) 2.5

4.(in-w) 3 1/2


4.(in-h) 1

4.(cm-w) 8.9

4.(cm-h) 2.5



Measure the width and height of each block in inches and in centimeters.



Answers

Ex.(in-w) 5

Ex.(in-h) 1 1/2

Ex.(cm-w) 12

Ex.(cm-h) 4




1.(in-w) _____

1.(in-h) _____

1.(cm-w) _____

1.(cm-h) _____



2.(in-w) _____

2.(in-h) _____

2.(cm-w) _____

2.(cm-h) _____

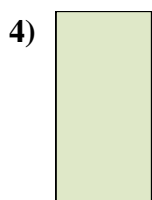


3.(in-w) _____

3.(in-h) _____

3.(cm-w) _____

3.(cm-h) _____



4.(in-w) _____

4.(in-h) _____

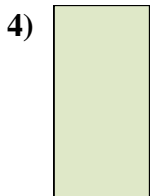



4.(cm-w) _____

4.(cm-h) _____

In		1		2		3		4		5		6		7				
Cm	1	2	3	4	5	6	7	8	9	10	11	12	13	14	15	16	17	18
In		1		2		3		4		5		6		7				
Cm	1	2	3	4	5	6	7	8	9	10	11	12	13	14	15	16	17	18
In		1		2		3		4		5		6		7				
Cm	1	2	3	4	5	6	7	8	9	10	11	12	13	14	15	16	17	18
In		1		2		3		4		5		6		7				
Cm	1	2	3	4	5	6	7	8	9	10	11	12	13	14	15	16	17	18
In		1		2		3		4		5		6		7				
Cm	1	2	3	4	5	6	7	8	9	10	11	12	13	14	15	16	17	18
In		1		2		3		4		5		6		7				
Cm	1	2	3	4	5	6	7	8	9	10	11	12	13	14	15	16	17	18
In		1		2		3		4		5		6		7				
Cm	1	2	3	4	5	6	7	8	9	10	11	12	13	14	15	16	17	18
In		1		2		3		4		5		6		7				
Cm	1	2	3	4	5	6	7	8	9	10	11	12	13	14	15	16	17	18
In		1		2		3		4		5		6		7				
Cm	1	2	3	4	5	6	7	8	9	10	11	12	13	14	15	16	17	18



Measure the width and height of each block in inches and in centimeters.



Answers

Ex.(in-w) 5

Ex.(in-h) 1 1/2

Ex.(cm-w) 12

Ex.(cm-h) 4

1.(in-w) 4 1/2

1.(in-h) 1 1/2

1.(cm-w) 11.4

1.(cm-h) 3.8

2.(in-w) 5 1/2

2.(in-h) 1 1/2

2.(cm-w) 14

2.(cm-h) 3.8

3.(in-w) 1 1/2

3.(in-h) 1

3.(cm-w) 3.8

3.(cm-h) 2.5

4.(in-w) 0 1/2

4.(in-h) 1

4.(cm-w) 1.3

4.(cm-h) 2.5




Measure the width and height of each block in inches and in centimeters.

Ex)



1)




2)



3)



4)



Answers

Ex.(in-w) 5

Ex.(in-h) 1 1/2

Ex.(cm-w) 12

Ex.(cm-h) 4

1.(in-w) _____

1.(in-h) _____

1.(cm-w) _____

1.(cm-h) _____

2.(in-w) _____

2.(in-h) _____

2.(cm-w) _____

2.(cm-h) _____

3.(in-w) _____

3.(in-h) _____

3.(cm-w) _____

3.(cm-h) _____

4.(in-w) _____

4.(in-h) _____



4.(cm-w) _____

4.(cm-h) _____

In		1		2		3		4		5		6		7				
Cm	1	2	3	4	5	6	7	8	9	10	11	12	13	14	15	16	17	18
In		1		2		3		4		5		6		7				
Cm	1	2	3	4	5	6	7	8	9	10	11	12	13	14	15	16	17	18
In		1		2		3		4		5		6		7				
Cm	1	2	3	4	5	6	7	8	9	10	11	12	13	14	15	16	17	18
In		1		2		3		4		5		6		7				
Cm	1	2	3	4	5	6	7	8	9	10	11	12	13	14	15	16	17	18
In		1		2		3		4		5		6		7				
Cm	1	2	3	4	5	6	7	8	9	10	11	12	13	14	15	16	17	18
In		1		2		3		4		5		6		7				
Cm	1	2	3	4	5	6	7	8	9	10	11	12	13	14	15	16	17	18
In		1		2		3		4		5		6		7				
Cm	1	2	3	4	5	6	7	8	9	10	11	12	13	14	15	16	17	18
In		1		2		3		4		5		6		7				
Cm	1	2	3	4	5	6	7	8	9	10	11	12	13	14	15	16	17	18
In		1		2		3		4		5		6		7				
Cm	1	2	3	4	5	6	7	8	9	10	11	12	13	14	15	16	17	18



Measure the width and height of each block in inches and in centimeters.



Answers

Ex.(in-w) 5

Ex.(in-h) 1 1/2

Ex.(cm-w) 12

Ex.(cm-h) 4

1.(in-w) 4 1/2

1.(in-h) 1 1/2

1.(cm-w) 11.4

1.(cm-h) 3.8

2.(in-w) 4

2.(in-h) 1 1/2

2.(cm-w) 10.2

2.(cm-h) 3.8

3.(in-w) 3

3.(in-h) 0 1/2

3.(cm-w) 7.6

3.(cm-h) 1.3

4.(in-w) 2


4.(in-h) 1 1/2

4.(cm-w) 5.1

4.(cm-h) 3.8



Measure the width and height of each block in inches and in centimeters.



Answers

Ex.(in-w) 5

Ex.(in-h) 1 1/2

Ex.(cm-w) 12

Ex.(cm-h) 4



1.(in-w) _____

1.(in-h) _____

1.(cm-w) _____

1.(cm-h) _____

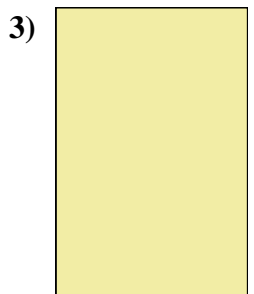


2.(in-w) _____

2.(in-h) _____

2.(cm-w) _____

2.(cm-h) _____



3.(in-w) _____

3.(in-h) _____

3.(cm-w) _____

3.(cm-h) _____



4.(in-w) _____

4.(in-h) _____



4.(cm-w) _____

4.(cm-h) _____

In		1		2		3		4		5		6		7				
Cm	1	2	3	4	5	6	7	8	9	10	11	12	13	14	15	16	17	18
In		1		2		3		4		5		6		7				
Cm	1	2	3	4	5	6	7	8	9	10	11	12	13	14	15	16	17	18
In		1		2		3		4		5		6		7				
Cm	1	2	3	4	5	6	7	8	9	10	11	12	13	14	15	16	17	18
In		1		2		3		4		5		6		7				
Cm	1	2	3	4	5	6	7	8	9	10	11	12	13	14	15	16	17	18
In		1		2		3		4		5		6		7				
Cm	1	2	3	4	5	6	7	8	9	10	11	12	13	14	15	16	17	18
In		1		2		3		4		5		6		7				
Cm	1	2	3	4	5	6	7	8	9	10	11	12	13	14	15	16	17	18
In		1		2		3		4		5		6		7				
Cm	1	2	3	4	5	6	7	8	9	10	11	12	13	14	15	16	17	18
In		1		2		3		4		5		6		7				
Cm	1	2	3	4	5	6	7	8	9	10	11	12	13	14	15	16	17	18
In		1		2		3		4		5		6		7				
Cm	1	2	3	4	5	6	7	8	9	10	11	12	13	14	15	16	17	18



Measure the width and height of each block in inches and in centimeters.



Answers

Ex.(in-w) 5

Ex.(in-h) 1 1/2

Ex.(cm-w) 12

Ex.(cm-h) 4

1.(in-w) 4

1.(in-h) 1

1.(cm-w) 10.2

1.(cm-h) 2.5

2.(in-w) 4 1/2

2.(in-h) 1

2.(cm-w) 11.4

2.(cm-h) 2.5

3.(in-w) 1

3.(in-h) 1 1/2

3.(cm-w) 2.5

3.(cm-h) 3.8

4.(in-w) 2

4.(in-h) 1


4.(cm-w) 5.1

4.(cm-h) 2.5




Measure the width and height of each block in inches and in centimeters.


Ex)



1)




2)



3)



4)



Answers

Ex.(in-w) 5

Ex.(in-h) 1 1/2

Ex.(cm-w) 12

Ex.(cm-h) 4

1.(in-w) _____

1.(in-h) _____

1.(cm-w) _____

1.(cm-h) _____

2.(in-w) _____

2.(in-h) _____

2.(cm-w) _____

2.(cm-h) _____

3.(in-w) _____

3.(in-h) _____

3.(cm-w) _____

3.(cm-h) _____

4.(in-w) _____

4.(in-h) _____




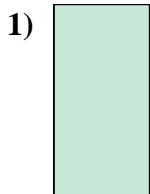

4.(cm-w) _____

4.(cm-h) _____

In		1		2		3		4		5		6		7				
Cm	1	2	3	4	5	6	7	8	9	10	11	12	13	14	15	16	17	18
In		1		2		3		4		5		6		7				
Cm	1	2	3	4	5	6	7	8	9	10	11	12	13	14	15	16	17	18
In		1		2		3		4		5		6		7				
Cm	1	2	3	4	5	6	7	8	9	10	11	12	13	14	15	16	17	18
In		1		2		3		4		5		6		7				
Cm	1	2	3	4	5	6	7	8	9	10	11	12	13	14	15	16	17	18
In		1		2		3		4		5		6		7				
Cm	1	2	3	4	5	6	7	8	9	10	11	12	13	14	15	16	17	18
In		1		2		3		4		5		6		7				
Cm	1	2	3	4	5	6	7	8	9	10	11	12	13	14	15	16	17	18
In		1		2		3		4		5		6		7				
Cm	1	2	3	4	5	6	7	8	9	10	11	12	13	14	15	16	17	18
In		1		2		3		4		5		6		7				
Cm	1	2	3	4	5	6	7	8	9	10	11	12	13	14	15	16	17	18
In		1		2		3		4		5		6		7				
Cm	1	2	3	4	5	6	7	8	9	10	11	12	13	14	15	16	17	18



Measure the width and height of each block in inches and in centimeters.



Answers

Ex.(in-w) 5

Ex.(in-h) 1 1/2

Ex.(cm-w) 12

Ex.(cm-h) 4

1.(in-w) 0 1/2

1.(in-h) 1

1.(cm-w) 1.3

1.(cm-h) 2.5

2.(in-w) 4 1/2

2.(in-h) 1

2.(cm-w) 11.4

2.(cm-h) 2.5

3.(in-w) 3 1/2

3.(in-h) 0 1/2

3.(cm-w) 8.9

3.(cm-h) 1.3

4.(in-w) 5


4.(in-h) 1

4.(cm-w) 12.7

4.(cm-h) 2.5



Measure the width and height of each block in inches and in centimeters.



Answers

Ex.(in-w) 5

Ex.(in-h) 1 1/2

Ex.(cm-w) 12

Ex.(cm-h) 4

1.(in-w) _____

1.(in-h) _____

1.(cm-w) _____

1.(cm-h) _____

2.(in-w) _____

2.(in-h) _____

2.(cm-w) _____

2.(cm-h) _____

3.(in-w) _____

3.(in-h) _____

3.(cm-w) _____

3.(cm-h) _____

4.(in-w) _____

4.(in-h) _____


4.(cm-w) _____

4.(cm-h) _____

In		1		2		3		4		5		6		7				
Cm	1	2	3	4	5	6	7	8	9	10	11	12	13	14	15	16	17	18
In		1		2		3		4		5		6		7				
Cm	1	2	3	4	5	6	7	8	9	10	11	12	13	14	15	16	17	18
In		1		2		3		4		5		6		7				
Cm	1	2	3	4	5	6	7	8	9	10	11	12	13	14	15	16	17	18
In		1		2		3		4		5		6		7				
Cm	1	2	3	4	5	6	7	8	9	10	11	12	13	14	15	16	17	18
In		1		2		3		4		5		6		7				
Cm	1	2	3	4	5	6	7	8	9	10	11	12	13	14	15	16	17	18
In		1		2		3		4		5		6		7				
Cm	1	2	3	4	5	6	7	8	9	10	11	12	13	14	15	16	17	18
In		1		2		3		4		5		6		7				
Cm	1	2	3	4	5	6	7	8	9	10	11	12	13	14	15	16	17	18
In		1		2		3		4		5		6		7				
Cm	1	2	3	4	5	6	7	8	9	10	11	12	13	14	15	16	17	18
In		1		2		3		4		5		6		7				
Cm	1	2	3	4	5	6	7	8	9	10	11	12	13	14	15	16	17	18



Measure the width and height of each block in inches and in centimeters.



Answers

Ex.(in-w) 5

Ex.(in-h) 1 1/2

Ex.(cm-w) 12

Ex.(cm-h) 4

1.(in-w) 2 1/2

1.(in-h) 0 1/2

1.(cm-w) 6.4

1.(cm-h) 1.3

2.(in-w) 4

2.(in-h) 0 1/2

2.(cm-w) 10.2

2.(cm-h) 1.3

3.(in-w) 3 1/2

3.(in-h) 1

3.(cm-w) 8.9

3.(cm-h) 2.5

4.(in-w) 5

4.(in-h) 1 1/2

4.(cm-w) 12.7

4.(cm-h) 3.8